



_____ 's



Swinging



into

2nd





grade



Summer
Work



Week 1: Day 1



Addition

Find the sums for each problem below.

$8 + \underline{\quad} = 12$

35

$\underline{\quad} + 3 = 14$

$$\begin{array}{r} 35 \\ + 24 \\ \hline \end{array}$$

$6 + \underline{\quad} = 11$

Subtraction

Find the difference for each problem below.

$12 - 6 = \underline{\quad}$

46

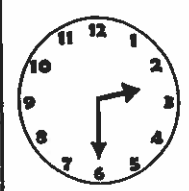
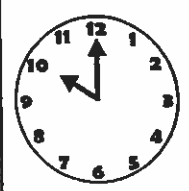
$14 - 7 = \underline{\quad}$

$$\begin{array}{r} 46 \\ - 23 \\ \hline \end{array}$$

$18 - 9 = \underline{\quad}$

Time

Write the times shown on the clocks.



:

:

Shapes

Answer the questions about the shapes below.

1.



___ sides
___ corners


2.



___ sides
___ corners

Place Value

Write how many tens and ones you have for each problem.



___ tens ___ ones = ___
+ ___ = ___

Word Problem

Answer the problem below. Show your work.

The girl had 2 apples, 3 oranges, and 2 bananas. How much fruit did she have in all?

add
subtract

$\underline{\quad} \square \underline{\quad} \square = \underline{\quad}$

Fact Families

Using the numbers below, create a fact family.

5

3

8

___ + ___ = ___
___ + ___ = ___
___ - ___ = ___
___ - ___ = ___

Week 1: Day 1

Syllables

Put the 6 words in the correct box.

summer fun shovel
bucket beach crab

1 syllable

2 syllables

ABC Order

Put the 6 words in ABC Order.

bag rat tag
cat lag fat


1. _____
2. _____
3. _____

4. _____
5. _____
6. _____

Categories

Circle the pictures that fit in the category written below.

animals



Nouns

Circle the people, places, & things.

trees run
play ball
eat beach
pencil of
the girl

Root Words

Circle the root words below.

eat	eating
plays	play
running	run
write	writes
walk	walked

Sentence Construction

Correct the sentences below. Rewrite them correctly.



1. the sun is bright

1. _____

2. he has a bucket

2. _____

Week 2: Day 1



Addition

Find the sums for each problem below.

$10 + \underline{\quad} = 12$

57

$\underline{\quad} + 7 = 10$

$+42$

$8 + \underline{\quad} = 13$

Subtraction

Find the difference for each problem below.

$18 - 6 = \underline{\quad}$

58



$12 - 7 = \underline{\quad}$

-20

$16 - 8 = \underline{\quad}$

Time

Write the times shown on the clocks

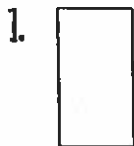


:

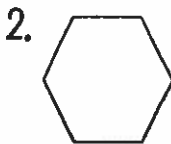
:

Shapes

Answer the questions about the shapes below.



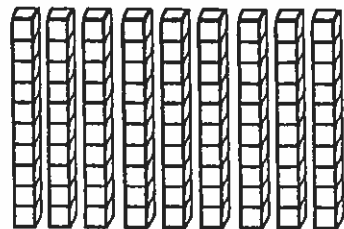
___ sides
___ corners



___ sides
___ corners

Place Value

Write how many tens and ones you have for each problem.



___ tens ___ ones = ___
+ ___ = ___

Word Problem

Answer the problem below. Show your work.

April had 2 pens. Max had 4 pens.
Sam had 6 pens. How many pens
did they have altogether?

add

subtract

$\underline{\quad} \square \square = \underline{\quad}$

Fact Families

Using the numbers below, create a fact family.

9

4


13

$\underline{\quad} + \underline{\quad} = \underline{\quad}$


$\underline{\quad} + \underline{\quad} = \underline{\quad}$

$\underline{\quad} - \underline{\quad} = \underline{\quad}$

$\underline{\quad} - \underline{\quad} = \underline{\quad}$



Week 2: Day 1



Syllables

Put the 6 words in the correct box.

funny nice cool
pretty great awesome

1 syllable

2 syllables



ABC Order

Put the 6 words in ABC Order.

dog hamster cat
lizard bird fish


1. _____
2. _____
3. _____

4. _____
5. _____
6. _____

Categories

Circle the pictures that fit in the category written below.

birthday



Adjectives

Find the describing words.

funny eat
doll nice
grass boy
yellow skinny
an tall

Root Words

Circle the root words below.

drink	drinking
earned	earn
carries	carry
host	hosted
make	makes

Sentence Construction

Correct the sentences below. Rewrite them correctly.



1. the flowers are blue

1. _____

2. april comes before may

2. _____

Week 3: Day 1



Addition

Find the sums for each problem below.

$9 + \underline{\quad} = 11$

50

$\underline{\quad} + 10 = 10$

$+30$

$7 + \underline{\quad} = 14$

Subtraction

Find the difference for each problem below.

$18 - 9 = \underline{\quad}$

43

$12 - 11 = \underline{\quad}$

-31

$15 - 7 = \underline{\quad}$

Time

Write the times shown on the clocks.

<input type="text"/>	<input type="text"/>

Shapes

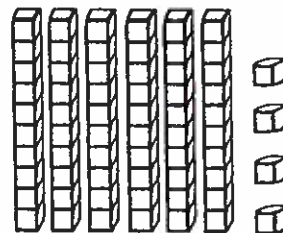
Answer the questions about the shapes below.

1. _____ sides
_____ corners

2. _____ sides
_____ corners

Place Value

Write how many tens and ones you have for each problem.



_____ tens _____ ones = _____
+ _____ = _____

Word Problem

Answer the problem below. Show your work.

Cam had 6 baseballs. Max had 3 baseballs. Sam had 4 baseballs. How many baseballs did they have altogether?

add
subtract

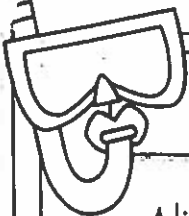


$\underline{\quad} \square \underline{\quad} \square = \underline{\quad}$

Fact Families

Using the numbers below, create a fact family.

6	2	8
---	---	---

_____ + _____ = _____
_____ + _____ = _____
_____ - _____ = _____
_____ - _____ = _____



Reading Comprehension

Alicia and Pam like to go to school. They get to learn new things and they get to see their friends. Both of them are in first grade with Mrs. Johnson. Alicia's favorite subject is science. She likes to learn about plants. Pam's favorite subject is math. She likes to see how fast she can add. Both of them love recess. Alicia likes the swings and Pam likes the slide. Alicia and Pam think that school is a lot of fun.



Read the story above. Use the story to answer the questions.

1. Who are the main characters in the story?

3. How are Alicia and Pam alike?

2. What is the setting?

4. How are Alicia and Pam different?

Sentence Construction


Correct the sentences below. Rewrite them correctly.


1. how old is your sister

1.


2. where is the school

2.





Week 4: Day 1



Addition

Find the sums for each problem below.

$6 + \underline{\quad} = 17$

70

$\underline{\quad} + 2 = 10$

+10

$9 + \underline{\quad} = 13$



Subtraction

Find the difference for each problem below.

$19 - 10 = \underline{\quad}$

45

$11 - 11 = \underline{\quad}$


-20

$13 - 5 = \underline{\quad}$



Time

Write the times shown on the clocks



Shapes

Read the questions. Circle the answers for each question



What shape is this?

- square
- rectangle



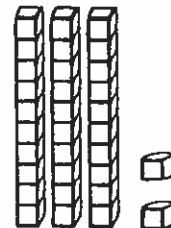
What shape is this?

- hexagon
- trapezoid



Place Value

Write how many tens and ones you have for each problem



___ tens ___ ones = ___
 + ___ = ___

Word Problem

Answer the problem below. Show your work.

Zack had 8 hats. His brother gave him 8 more hats. How many hats does Zack have in all?

add

subtract

Fact Families

Using the numbers below, create a fact family.

10

4

14

$\underline{\quad} + \underline{\quad} = \underline{\quad}$

$\underline{\quad} + \underline{\quad} = \underline{\quad}$

$\underline{\quad} - \underline{\quad} = \underline{\quad}$

$\underline{\quad} - \underline{\quad} = \underline{\quad}$

Week 4: Day 1

Syllables

Put the 6 words in the correct box.

burger fries cupcake
hotdog drink chips

1 syllable

2 syllables

ABC Order

Put the 6 words in ABC Order.

ketchup mustard hamburger
lettuce tomato pickles

1. _____

4. _____

2. _____

5. _____


3. _____

6. _____

Categories

Circle the pictures that fit in the category written below.

Desserts



Verbs

Circle the verbs (action words) below.

run play
big wolf
jump desk
talk friends
blue walk

Root Words

Circle the root words below.

watched	watch
bigger	big
raise	raised
tell	telling
matched	match

Sentence Construction

Correct the sentences below. Rewrite them correctly.



1. we ate chips and hotdogs

1. _____

2. the boys went to burger king

2. _____

Week 5: Day 1



Addition

Find the sums for each problem below.

$5 + \underline{\quad} = 11$

50

$\underline{\quad} + 8 = 13$

$+20$

$6 + \underline{\quad} = 10$

Subtraction

Find the difference for each problem below.

$16 - 8 = \underline{\quad}$

59


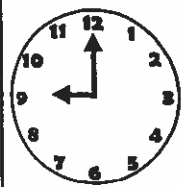
$14 - 5 = \underline{\quad}$

-34

$12 - 7 = \underline{\quad}$

Time

Write the times shown on the clocks.



:

:

Shapes

Read the questions. Circle the answers for each question.

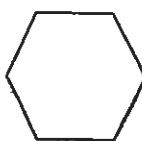
1.



What shape is this?

square
rectangle

2.

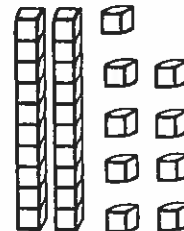


What shape is this?

hexagon
trapezoid

Place Value

Write how many tens and ones you have for each problem.



$\underline{\quad}$ tens $\underline{\quad}$ ones = $\underline{\quad}$
 $\underline{\quad}$ + $\underline{\quad}$ = $\underline{\quad}$

Word Problem

Answer the problem below. Show your work.

Jessica picked 12 flowers. She gave some away. She has 8 left. How many did she give away?

add

subtract

$\underline{\quad} - \underline{\quad} = \underline{\quad}$

Fact Families

Using the numbers below, create a fact family.

6

7

13

$\underline{\quad} + \underline{\quad} = \underline{\quad}$

$\underline{\quad} + \underline{\quad} = \underline{\quad}$

$\underline{\quad} - \underline{\quad} = \underline{\quad}$

$\underline{\quad} - \underline{\quad} = \underline{\quad}$

Week 5: Day 1

Dictionary Skills

Read the definitions. Decide which definition was used in the sentence.

trip

1. to go on a vacation (noun)
2. to fall over something (verb)

The stick tripped the girl.

- Definition 1
- Definition 2

ABC Order

Put the 6 words in ABC Order.

pen	book	glue
desk	stapler	eraser

1. _____	4. _____
2. _____	5. _____
3. _____	6. _____

Vowels

Circle the words with short vowels.

tame	mat
cab	late
bat	bite
came	lab
tack	take

Pronouns

Circle the words that are pronouns.

she	pen
light	him
her	I
paper	glue
they	feet

Compound Words

Circle the compound words below.

toothpick	talking
driver	seashore
scissors	football
railroad	papers
earring	lemons

Sentence Construction

Correct the sentences below. Rewrite them correctly.



1. what did you eat for dinner

1. _____

2. sam and meg went to eat

2. _____

Week 6: Day 1



Addition

Find the sums for each problem below.

$6 + \underline{\quad} = 17$

70

$\underline{\quad} + 2 = 10$

$+10$

$9 + \underline{\quad} = 13$

Subtraction

Find the difference for each problem below.

$19 - 10 = \underline{\quad}$

45

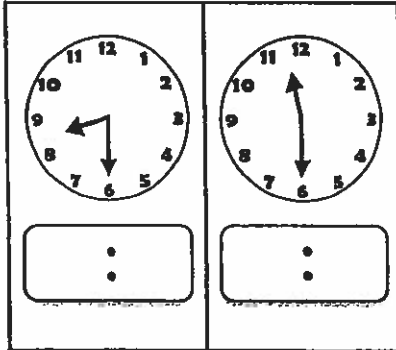
$11 - 11 = \underline{\quad}$

-20

$13 - 5 = \underline{\quad}$

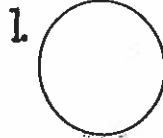
Time

Write the times shown on the clocks.



Shapes

Read the questions. Circle the answers for each question.



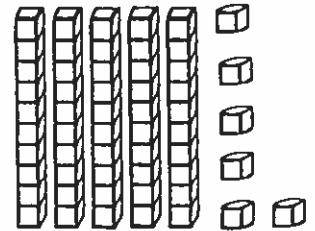
What shape is this?
hexagon
circle



What shape is this?
square
triangle

Place Value

Write how many tens and ones you have for each problem.



 tens ones =
 + =

Word Problem

Answer the problem below. Show your work.

Kim has 12 coins. She gave 6 of them to Molly. How many does she have left?

add

subtract

$\underline{\quad} \square \underline{\quad} = \underline{\quad}$

Fact Families

Using the numbers below, create a fact family.

9

2


11

$\underline{\quad} + \underline{\quad} = \underline{\quad}$


$\underline{\quad} + \underline{\quad} = \underline{\quad}$

$\underline{\quad} - \underline{\quad} = \underline{\quad}$

$\underline{\quad} - \underline{\quad} = \underline{\quad}$



Week 6: Day 1



Reading Comprehension

Lisa wants to go outside to play, but it is very cold. She puts on her coat, mittens, hat, and boots. Then, she runs out the door. There is snow everywhere. Lisa's friend Grace comes over to play. They decide they want to build a huge snowman. They rolled the snow into three big balls. Then, they stacked the balls up and put sticks, eyes, a nose, and a hat on the snowman. When they finished building the snowman, the girls were cold. They went in Lisa's house and sat next to the fire. The girls had a fun, cold day.



Read the story above. Use the story to answer the questions.

1. Who are the characters in the story?

2. What is the setting?

3. What did the girls decide to do?

4. What do you like to do on cold days?

Sentence Construction


Correct the sentences below. Rewrite them correctly.

1. i left my book and pencil at school

1.

2. did matt ride the horse

2.



Week 7: Day 1

Addition

Find the sums for each problem below.

$4 + \underline{\quad} = 13$

$\underline{\quad} + 40 = 40$

$\underline{\quad} + 6 = 11$

$\begin{array}{r} 40 \\ + 20 \\ \hline \end{array}$

$8 + \underline{\quad} = 8$

Subtraction

Find the difference for each problem below.

$16 - 9 = \underline{\quad}$

$67 - \underline{\quad} = 67$

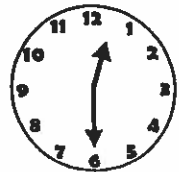
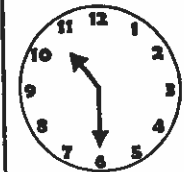
$12 - 11 = \underline{\quad}$

$\begin{array}{r} 67 \\ - 33 \\ \hline \end{array}$

$15 - 6 = \underline{\quad}$

Time

Write the times shown on the clocks

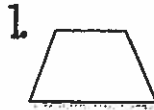


:

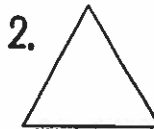
:

Shapes

Read the questions. Circle the answers for each question.



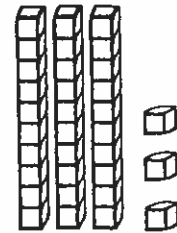
What shape is this?
hexagon
trapezoid



What shape is this?
square
triangle

Place Value

Write how many tens and ones you have for each problem.



 tens ones =
 + =

Word Problem

Answer the problem below. Show your work.

Pam ran 8 laps yesterday and 2 laps today. How many more laps did she run yesterday than today?

add
subtract

□ =

Fact Families

Using the numbers below, create a fact family.

10

5

15

$\underline{\quad} + \underline{\quad} = \underline{\quad}$

$\underline{\quad} + \underline{\quad} = \underline{\quad}$

$\underline{\quad} - \underline{\quad} = \underline{\quad}$

$\underline{\quad} - \underline{\quad} = \underline{\quad}$

Week 7: Day 1

Syllables

Put the 6 words in the correct box.

dog

cat

turtle

horses

fish

hamster

1 syllable

2 syllables

ABC Order

Put the 6 words in ABC Order.

match

catch

hatch

patch

latch

batch

1. _____

4. _____

2. _____

5. _____

3. _____

6. _____

Nouns & Verbs

Circle the correct verb for the noun.

The girl _____ pictures.

draw

draws

My friends _____.

talk

talks

Proper Nouns

Find the specific people, places, and things.

Betty

girl

dog

McDonalds

sofa

Walmart

Georgia

toys

trees

Mr. White

Singular Nouns

Circle the singular nouns.

pencils

pencil

books

book

cat

cats

friends

friend

chicken

chickens

Sentence Construction

Correct the sentences below. Rewrite them correctly.



1. my birthday is april 4 2000

1. _____

2. the bear ate honey

2. _____

Week 8: Day 1



Addition

Find the sums for each problem below.

$6 + \underline{\quad} = 12$

30

$\underline{\quad} + 3 = 6$

$+30$

$7 + \underline{\quad} = 14$

Subtraction

Find the difference for each problem below.

$14 - 6 = \underline{\quad}$

73



$10 - 3 = \underline{\quad}$

-21

$12 - 6 = \underline{\quad}$

Time

Write the times shown on the clocks.




:

:

Shapes

Read the questions. Circle the answers for each question.

1.



What shape is this?
circle
cylinder

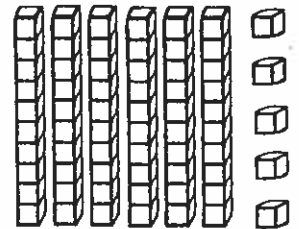
2.



What shape is this?
rectangle
cube

Place Value

Write how many tens and ones you have for each problem.



 tens ones =
 + =

Word Problem

Answer the problem below. Show your work.

Max ate 5 apple slices. Cam ate 7 apple slices. How many apple slices did they eat altogether?

add

subtract

$\underline{\quad} \square \underline{\quad} = \underline{\quad}$

Fact Families

Using the numbers below, create a fact family.

2

8

10



$\underline{\quad} + \underline{\quad} = \underline{\quad}$

$\underline{\quad} + \underline{\quad} = \underline{\quad}$

$\underline{\quad} - \underline{\quad} = \underline{\quad}$

$\underline{\quad} - \underline{\quad} = \underline{\quad}$

Week 8: Day 1



Syllables

Put the 6 words in the correct box.

actor cab cabin
bunny nap fun

1 syllable

2 syllables

ABC Order

Put the 6 words in ABC Order.

tomato lettuce beans
potato squash carrot

1. _____
2. _____
3. _____

4. _____
5. _____
6. _____

Nouns & Verbs

Circle the correct verb for the noun.

My horse _____ buggles.

pull

pulls

The cats _____ their food.

eat

eats

Proper Nouns

Find the specific people, places, and things.

man Zack

Olive Garden store

Italy river

girl Mrs. Sims

Old Navy school

Singular Nouns

Circle the singular nouns.

bee

bees

dogs

dog

goats

goat

horses

horse

cow

cows

Sentence Construction

Correct the sentences below. Rewrite them correctly.



1. i like cake cookies and chips

1. _____

2. may made pasta for lunch

2. _____

Week 9: Day 1



Addition

Find the sums for each problem below.

$8 + \underline{\quad} = 11$

70

$\underline{\quad} + 4 = 9$

$\begin{array}{r} +20 \\ \hline \end{array}$

$9 + \underline{\quad} = 13$

Subtraction

Find the difference for each problem below.

$12 - 6 = \underline{\quad}$

64



$11 - 7 = \underline{\quad}$

$\begin{array}{r} -31 \\ \hline \end{array}$

$17 - 8 = \underline{\quad}$

Time

Write the times shown on the clocks.



:

:

Shapes

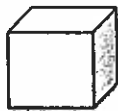
Read the questions. Circle the answers for each question.

1.



What shape is this?
triangle
rectangle

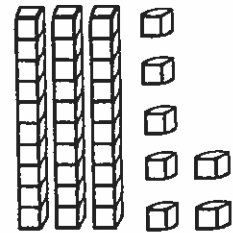
2.



What shape is this?
cube
circle

Place Value

Write how many tens and ones you have for each problem.



 tens ones =
+ =

Word Problem

Answer the problem below. Show your work.

Gabe scored 10 points in his game Friday and 3 points in his game Saturday. How many points did he score in all?

add

subtract

$\underline{\quad} \square \underline{\quad} = \underline{\quad}$

Fact Families

Using the numbers below, create a fact family.

6

7

13



$\underline{\quad} + \underline{\quad} = \underline{\quad}$

$\underline{\quad} + \underline{\quad} = \underline{\quad}$

$\underline{\quad} - \underline{\quad} = \underline{\quad}$

$\underline{\quad} - \underline{\quad} = \underline{\quad}$

Week 9: Day 1



Syllables

Put the 6 words in the correct box.

super dogs walks
berry wonder friend

1 syllable

2 syllables

ABC Order

Put the 6 words in ABC Order.

Zack Jason Beth
Mary Kristen Tim

1.

2.

3.

4.

5.

6.

Nouns & Verbs

Circle the correct verb for the noun.

The boys _____ ball.

play

plays

The horses _____ water.

drink

drinks

Nouns

Circle people, places, and things.

boy called
of kids
bank the
zoo baseball
came walked

Plural Nouns

Circle the plural nouns.

tree	trees
bikes	bike
cars	car
animal	animals
letters	letter

Sentence Construction


Correct the sentences below. Rewrite them correctly.

1. can you draw a pig


1.

2. tim plays golf tennis and baseball

2.



Week 10: Day 1



Addition

Find the sums for each problem below.


$3 + \underline{\quad} = 13$

65

$\underline{\quad} + 6 = 9$

+32

$7 + \underline{\quad} = 12$



Subtraction

Find the difference for each problem below.

$5 - 4 = \underline{\quad}$

57

$9 - 2 = \underline{\quad}$

-25

$13 - 5 = \underline{\quad}$



Time

Write the times shown on the clocks.

<div style="border: 1px solid black; width: 40px; height: 30px; display: flex; align-items: center; justify-content: center;">:</div>	<div style="border: 1px solid black; width: 40px; height: 30px; display: flex; align-items: center; justify-content: center;">:</div>



Shapes

Read the questions. Circle the answers for each question.

1.



___ sides
___ corners

2.

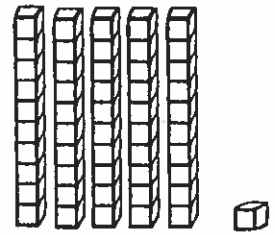


___ sides
___ corners



Place Value

Write how many tens and ones you have for each problem.



___ tens ___ ones = ___
+ ___ = ___

Word Problem

Answer the problem below. Show your work.

London has 20 markers. She gives some away. She has 10 markers left. How many did London give away?

add

subtract

$\underline{\quad} - \square = \underline{\quad}$

Fact Families

Using the numbers below, create a fact family.

8

2

10



$\underline{\quad} + \underline{\quad} = \underline{\quad}$

$\underline{\quad} + \underline{\quad} = \underline{\quad}$

$\underline{\quad} - \underline{\quad} = \underline{\quad}$

$\underline{\quad} - \underline{\quad} = \underline{\quad}$

Week 10: Day 1



Syllables

Put the 6 words in the correct box.

ham turkey dressing
squash beets chicken

1 syllable

2 syllables

ABC Order

Put the 6 words in ABC Order.

thick pail boat
yet ocean fast

1.

4.

2.

5.

3.

6.

Nouns & Verbs

Circle the correct verb for the noun.

Caleb _____ his name.

write

writes

Jess _____ her friend.

call

calls

Nouns

Circle people, places, and things.

fat

feather

raft

ran

elephant

empty

pull

tunnel

key

shiny

Plural Nouns

Circle the plural nouns.

kits

kit

farmers

farmer

tent

tents

pancakes

pancake

jar

jars

Sentence Construction

Correct the sentences below. Rewrite them correctly.

1. the kids whisper to each other

1.

2. it is hot in june and july

2.

